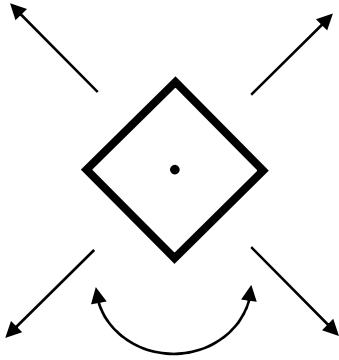


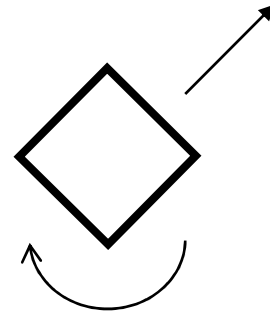
A

Make $\frac{1}{4}$ turn or
flip on any axis




B

NO
Flip $\frac{1}{4}$ turn away



YES
Rotate $\frac{1}{4}$ turn clockwise

C



D

