

CURRICULUM INSPIRATIONS: www.maa.org/ci
Math for America DC: www.mathforamerica.org/DC

Innovative Online Courses: www.gdaymath.com
Tanton Tidbits: www.jamestanton.com



★ WILDLY COOL MATH! ★

CURIOUS MATHEMATICS FOR FUN AND JOY



SEPTEMBER 2014

PROMOTIONAL CORNER: *Have you an event, a workshop, a website, some materials you would like to share with the world? Let me know! If the work is about deep and joyous and real mathematical doing I would be delighted to mention it here.*

Looking for an absorbing math read about academia, coffee, blueberry muffins, love, and more? Check out Gary Earnest Davis's novel *Coffee, Love and Matrix Algebra* at <http://www.coffee-love-matrixalgebra.com/>. (I may be a little biased in my review of this piece because of page 29!)

PUZZLER 1: Cover a rubber ball with dots, lots of dots. Color some dots azure (A), some dots blush (B), and some dots crimson (C). Now draw lots of non-intersecting lines connecting pairs of dots to make spherical triangles. Completely cover the surface with these triangles. (Make sure every surface region is bounded by three edges and three vertices.)

Juju looks at the design she made this way on a rubber ball and notices that one of her triangles has corners one of each color. Explain why Juju is sure to have at least one more ABC triangle on her ball.

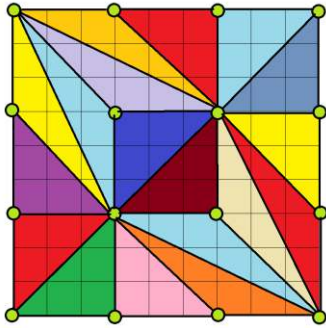


Gathering 4 Gardner
PRESENTS
Celebration of Mind

For more activities, visit: www.CelebrationOfMind.org



PUZZLER 2: It is possible to divide a 9×9 grid of squares into eighteen triangles of equal area, each with a vertex at an intersection point.



Is it possible to divide the 9×9 grid of squares into an odd number of triangles of equal area (with vertices at grid points)?

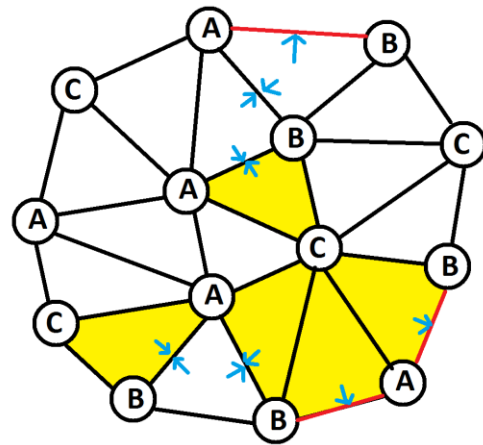
For each counting number N it is possible to divide an $N \times N$ grid of squares into an even number of triangles of equal area, each with vertices at intersection points. (Two triangles, for example!) Is there any value of N for which an $N \times N$ grid of squares can be so subdivided into an odd number of triangles?



SPERNER'S LEMMA

In 1928 German mathematician Emanuel Sperner developed the following delightful result:

Suppose a polygon is subdivided into triangles (making sure that each pair of neighboring triangles meet along an entire edge length). If we randomly label the vertices of all the triangles A, B, and C, then the count of outside edges labeled AB has the same parity as the count of triangles fully labeled ABC. (So if there are an odd number of outer AB edges, then there are an odd number of ABC triangles. If there are an even number of outer AB edges, then there are an even number of ABC triangles.)



This decagon has 3 outside AB edges and 5 interior ABC triangles. Both of these counts is odd.

The proof of this result is lovely too.

PROOF: Draw arrows inside each triangle pointing to any AB edges. Let's examine how many arrows there are.

Counting by Triangles: Every ABC triangle contains one arrow. All other triangles (CCC triangles, AAB triangles, ACC triangles, and so on) contain either zero or two arrows. It follows that the number of arrows has the same parity as the number of ABC triangles. (Thus if one count is odd or is even, the other is the same.)

Counting by Edges: Each outside AB edge has one arrow. Each inside AB edge has two arrows. All other edges have no arrows. So the number of arrows has the same parity as the number of outside AB edges.

We see that the number of arrows, the number of ABC triangles, and the number of outside AB edges all have the same parity.

Question 1: What can you say about the number of outside BC edges and the number of outside AC edges?

Question 2: Can you now prove that the number of ABC triangles in puzzle 1 has to be even?

We have:

$$\frac{N^2}{k} = \frac{1}{2} | x_1y_2 + x_2y_3 + x_3y_1 - y_1x_2 - y_2x_3 - y_3x_1 |$$

Of the six terms on the right, all are even except x_2y_3 . Thus the right side is a fraction of the form: $\frac{\text{odd}}{2}$. Since N is odd, it better be the case that k is even.

HARDER CASE: If N is an even integer...

If N is even we can write $N = 2^a m$ for some $a \geq 1$ and some odd integer m .

We'll now follow the same proof as before, but we'll be more explicit about the powers of two that appear in all our integers.

Give each triangle vertex (x, y) a label as follows:

Write $x = 2^b p$ with p odd and $b \geq 0$, and $y = 2^c q$ with q odd and $c \geq 0$. (Or if $x = 0$, a number highly divisible by two, declare $b = \infty$, an infinitely large number, and interpret the role of x appropriately in the remainder of this proof. Ditto if $y = 0$.)

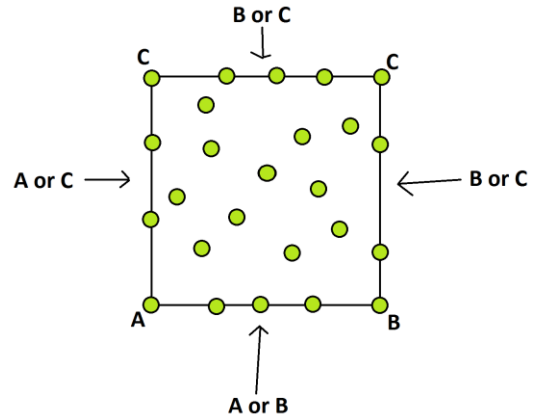
Label (x, y) :

- A if $b > a$ and $c > a$.
- B if at least one of b or c is $\leq a$, and $b < c$.
- C if at least one of b or c is $\leq a$, and $b \geq c$.

NOTE: For the case with N an odd number we have $a = 0$, and these labels match the labels we assigned before.

Also note that the condition for B forces $a \geq b$ and the condition for C forces $a \geq c$.

The vertices that lie on the corners and the edges of the square will have labels almost the same as before:



We see again that there must be an odd count of outside AB edges, and so our diagram contains at least one ABC triangle.

Suppose the vertex labeled A in this triangle has coordinates (x_1, y_1) , the vertex labeled B has coordinates (x_2, y_2) , and the vertex labeled C coordinate (x_3, y_3) . (Notice that x_2 cannot be zero, and y_3 cannot be zero.) We have:

$$\frac{N^2}{k} = \frac{1}{2} | x_1y_2 + x_2y_3 + x_3y_1 - y_1x_2 - y_2x_3 - y_3x_1 |$$

That is,

$$| x_1y_2 + x_2y_3 + x_3y_1 - y_1x_2 - y_2x_3 - y_3x_1 |$$

is an integer of the form $\frac{2^{2a+1}m^2}{k}$ with m

odd. If k is odd, then this integer is divisible by 2^{2a+1} . We'll show that this is not possible, forcing us to conclude that k is even.

Writing $x_1 = 2^{b_1} p_1$, $y_3 = 2^{c_3} q_3$, and so on, we have:

$$\begin{matrix} b_1 > a & c_2 > b_2 & b_3 \geq c_3 \\ c_1 > a & a \geq b_2 & a \geq c_3 \end{matrix}$$

Now:

$$x_1 y_2 = 2^{b_1+c_2} p_1 q_2 > 2^{a+b_2} p_1 q_2 \geq 2^{c_3+b_2} p_1 q_2$$

$$x_2 y_3 = 2^{b_2+c_3} p_2 q_3$$

$$x_3 y_1 = 2^{b_3+c_1} p_3 q_1 \geq 2^{c_3+a} p_3 q_1 \geq 2^{c_3+b_2} p_3 q_1$$

$$y_1 x_2 = 2^{b_2+c_1} p_2 q_1 > 2^{b_2+c_3} p_2 q_1$$

$$y_2 x_3 = 2^{b_3+c_2} p_3 q_2 > 2^{b_2+c_3} p_3 q_2$$

$$y_3 x_1 = 2^{b_1+c_3} p_1 q_3 > 2^{b_2+c_3} p_1 q_3$$

We have that each term has $2^{b_2+c_3}$ as a factor, with this being that largest power of two that divides $x_2 y_3$. This means that

$|x_1 y_2 + x_2 y_3 + x_3 y_1 - y_1 x_2 - y_2 x_3 - y_3 x_1|$ is an integer divisible by highest power of two $2^{b_2+c_3}$:

$$\begin{aligned} |x_1 y_2 + x_2 y_3 + x_3 y_1 - y_1 x_2 - y_2 x_3 - y_3 x_1| \\ = 2^{b_2+c_3} \times \text{odd} \end{aligned}$$

But $2^{b_2+c_3} \leq 2^{a+a} = 2^{2a}$. This integer can't be of the form $\frac{2^{2a+1} m^2}{k}$ if k is odd.

That's it!

VERY HARD CHALLENGE: Prove that it is impossible to divide a square of any size into an odd number of triangles of the same area. (The vertices of the triangles can now lie anywhere within the square: they need not have integer coordinates!)

Comment: Our proof for puzzle 2 makes use of the highest powers of two that divide various integers. By using a "2-adic valuation" one can extend our approach to establish the claim made in the very hard challenge! (Or can you come up with a simple proof that does not make use of advanced mathematical tools? If you do, let me know!)



RESEARCH CORNER:

Show that one can divide a 9×9 square into 2, 6, 18, 54, and 162 triangles of equal area and with vertices having integer coordinates. Are any other counts of triangles possible?

For each N what are the possible counts of triangles of equal area, with vertices at integer points, subdividing an $N \times N$ grid of squares?

MORE RESEARCH:

Care to subdivide an equilateral triangle into triangles of equal area? Into quadrilaterals of equal area? Cubes into tetrahedra of equal volume? (Oh heavens!)



© 2014 James Tanton
stanton.math@gmail.com